








# Numeracy\_Addition

Add the following groups of objects. The first one has been done for you.

 <input type="text" value="3"/>	 <input type="text" value="1"/>	 <input type="text" value="4"/>
---	---	---

 <input type="text"/>	 <input type="text"/>	 <input type="text"/>
--	--	--------------------------

 <input type="text"/>	 <input type="text"/>	 <input type="text"/>
---	---	--------------------------

Add the following groups of objects.

$$\begin{array}{c} \text{[Envelope]} \text{ [Envelope]} + \text{ [Envelope]} \text{ [Envelope]} \text{ [Envelope]} = \text{[Box]} \\ \text{[Box]} \qquad \qquad \qquad \text{[Box]} \end{array}$$

$$\begin{array}{c} \text{[Arrow]} \text{ [Arrow]} \text{ [Arrow]} \text{ [Arrow]} + \text{ [Arrow]} \text{ [Arrow]} \text{ [Arrow]} = \text{[Box]} \\ \text{[Box]} \qquad \qquad \qquad \text{[Box]} \end{array}$$

$$\begin{array}{c} \text{[Smiley]} \text{ [Smiley]} \text{ [Smiley]} \text{ [Smiley]} + \text{ [Smiley]} \text{ [Smiley]} \text{ [Smiley]} \text{ [Smiley]} = \text{[Box]} \\ \text{[Box]} \qquad \qquad \qquad \text{[Box]} \end{array}$$

Add the following groups of objects.

$$\square\square\square\square\square\square + \square\square\square = \underline{\hspace{2cm}}$$



$$\square\square\square\square\square + \square\square = \underline{\hspace{2cm}}$$



$$\square\square\square + \square\square\square = \underline{\hspace{2cm}}$$



$$\square\square\square\square\square + \square\square\square = \underline{\hspace{2cm}}$$



$$\square\square\square\square\square\square + \square\square\square\square = \underline{\hspace{2cm}}$$

